






Basic Fractions – 1.15

Divide something into NINE equal parts and we get "ninths."

1. Divide each shape into nine. Write " $\frac{1}{9}$ " or "one ninth" on each part.



2. Color eight ninths of each set.



3. Color two fourths of this box.



4. Color five eighths of this box.

