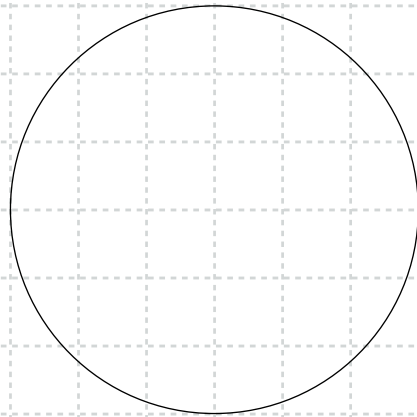


Basic Fractions – 1.18

Use what you have learned to show these fractions.



$5/8$




$9/10$




$2/5$




$1/2$



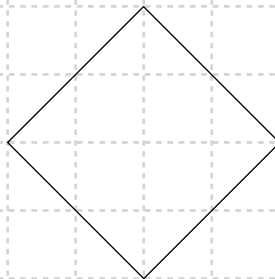
$1/3$



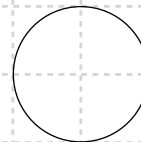
$1/3$



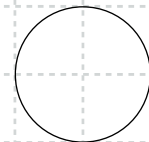
$7/8$



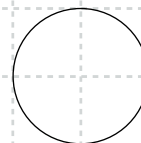
$3/4$



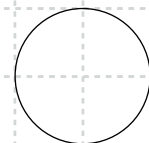
$1/2$



$3/4$



$1/8$



$5/8$