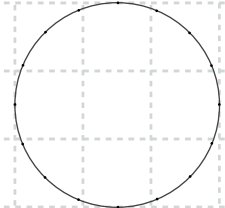



Basic Fractions – 1.26

On this page, we start reviewing for the unit-ending test.

Color three eighths of these shapes.



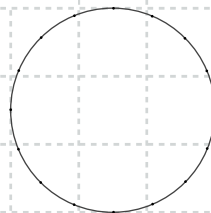
Color five sevenths of this shape.



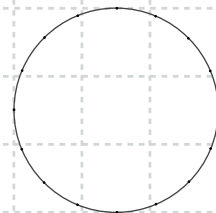
Show these fractions.



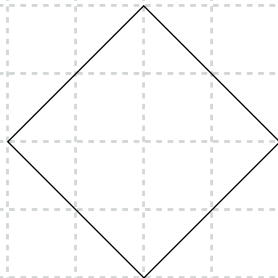
$\frac{2}{3}$



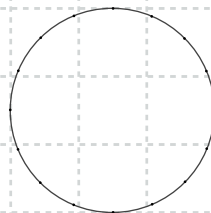
$\frac{1}{2}$



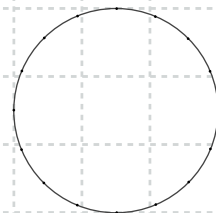
$\frac{7}{8}$



$\frac{1}{4}$



$\frac{3}{4}$



$\frac{12}{16}$