

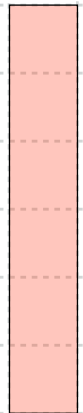


# Basic Fractions – 1.4

Divide something into THREE EQUAL PARTS and we get "thirds"

1. The box is one whole. Make a total of sixteen.



2. Divide these shapes into three equal parts.



3. Split each shape into thirds. Write "one third" on each part.

