
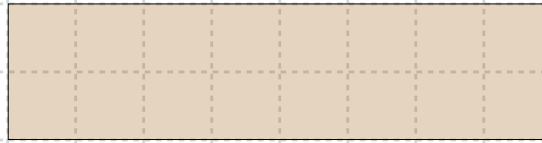
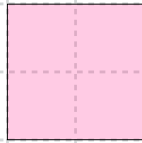


Basic Fractions – 1.5

Divide something into FOUR EQUAL PARTS and we get "fourths."

1. Divide these shapes into four equal parts.



2. Divide each shape into fourths. Write "one fourth" on each part.

