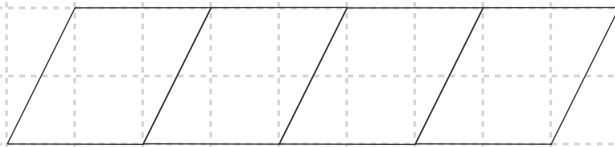



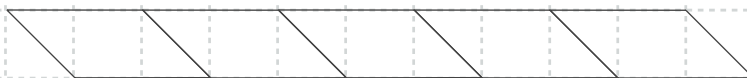
# Basic Fractions – 1.9

How can we describe the uncolored part of each shape?

1. Color three fourths of these shapes.



2. Color four fifths of these shapes.



3. Color two thirds of these shapes.



4. Color one fourth of these shapes.

