





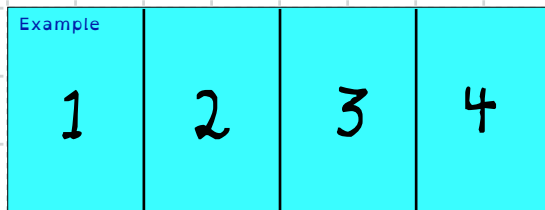
Learning To Divide – 1.0

Ask for help if you do not understand any of the directions.


1. Divide each line into **TWO EQUAL PARTS**. Then number each part.



2. Divide each box into **FOUR EQUAL PARTS**. Then number each part.



3. Color the shapes to show all the **SETS OF THREE** you can find.



How many sets of three were there in all? _____