


# Learning To Divide – 1.12

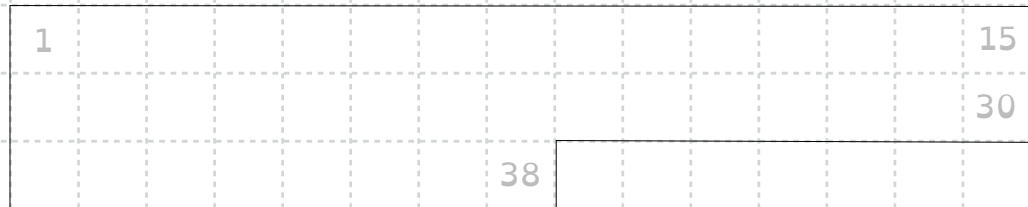
Create diagrams to help you find the answers to these division questions. Then use the inverse operation to check your work.

1)  $29 \div 4 =$




The inverse operation: \_\_\_\_\_

2)  $38 \div 7 =$



The inverse operation: \_\_\_\_\_

3)  $42 \div 5 =$



The inverse operation: \_\_\_\_\_