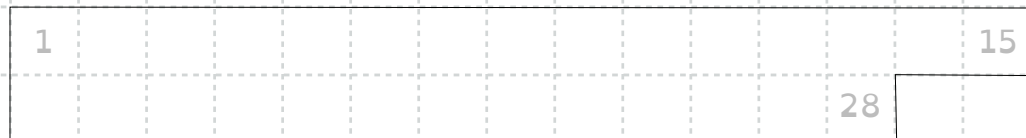


Learning To Divide – 1.14

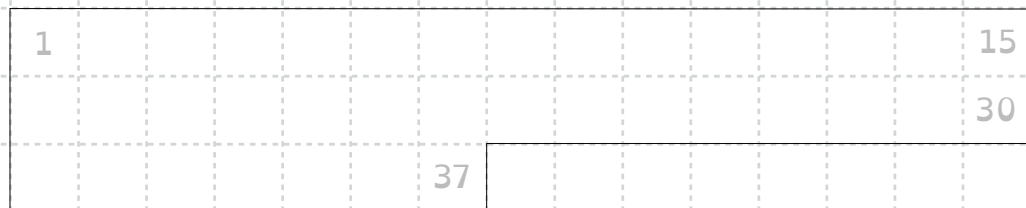
Create diagrams to help you find the answers to these division questions.
Then use the inverse operation to check your work.

1) $28 \div 6 =$



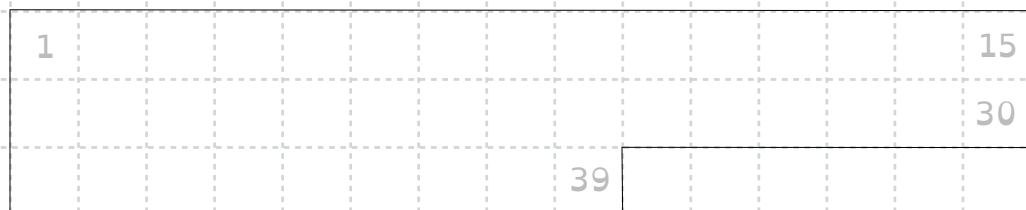
The inverse operation: _____

2) $37 \div 4 =$



The inverse operation: _____

3) $39 \div 8 =$



The inverse operation: _____