


Learning To Divide – 1.3

Color the graphics to find the answer to each question.
THEN circle the word that matches the answers you found.

Example: $27 \div 3 =$




- a) seven b) eight c) nine d) ten

1) $32 \div 4 =$



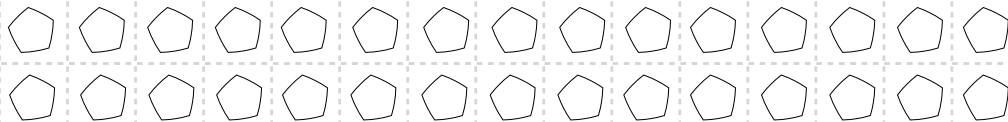
- a) five b) six c) seven d) eight

2) $26 \div 2 =$



- a) eleven b) twelve c) thirteen d) fourteen

3) $30 \div 6 =$



- a) five b) six c) seven d) eight