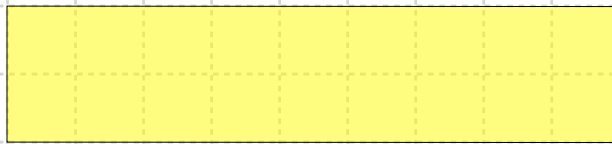




Learning To Divide – 1.31


There are only two more pages of review before the test!

Divide each of these shapes into THREE EQUAL PARTS.



Create a diagram to help you find the answer to these questions.

$$47 \div 3 =$$



Find the answer to these division questions.

$$6 \overline{) 81}$$

$$15 \overline{) 175}$$

$$20 \overline{) 139}$$