


Learning To Divide – 1.4

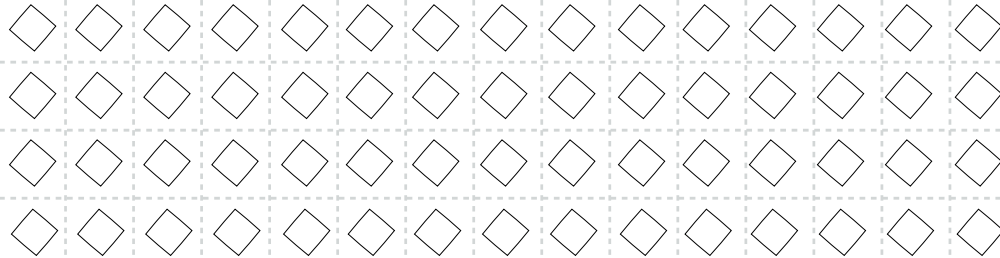
Read the question and color the graphics to find the answer.
Then circle the word that matches the answer.

1) $42 \div 6 =$




- a) seven b) eight c) nine d) ten

2) $60 \div 5 =$



- a) twelve b) thirteen c) fourteen d) fifteen

3) $64 \div 8 =$



- a) five b) six c) seven d) eight