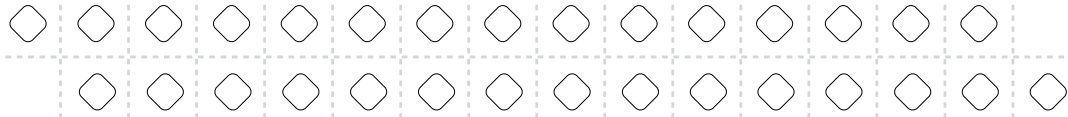


Learning To Divide – 1.8


Remember to check your work with the inverse operation, too.

1) $30 \div 7 =$




Write the inverse operation: _____

2) $51 \div 4 =$



Write the inverse operation: _____

3) $48 \div 9 =$



Write the inverse operation: _____