


Learning To Divide – 1.9

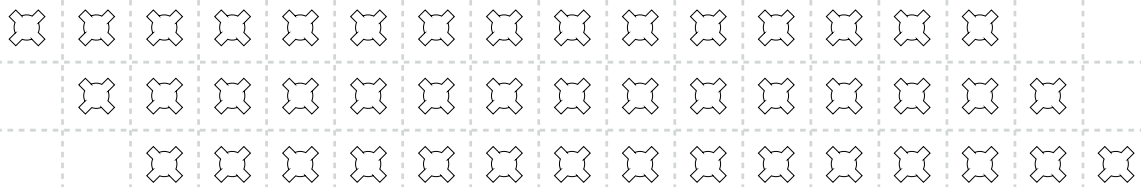
Find the answers to these division questions and use the inverse operation to check your work.

1) $28 \div 3 =$



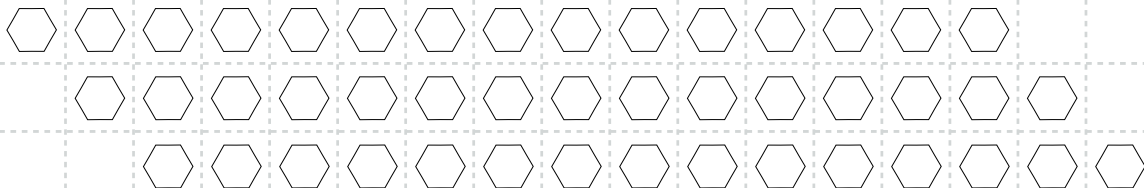
Write the inverse operation: _____

2) $45 \div 4 =$



Write the inverse operation: _____

3) $45 \div 7 =$



Write the inverse operation: _____