


Learning To Divide – Test #1

Answer these questions as quickly as you can.


TIME:

Divide each of these shapes into FIVE EQUAL PARTS.

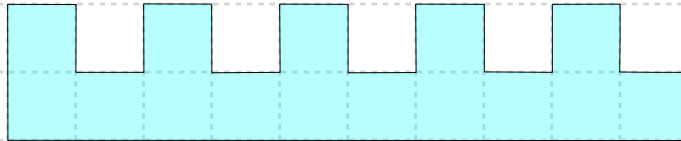
①



②




③



Create diagrams to help you find the answers to these questions.

④

$47 \div 3 =$ _____



⑤a

$29 \div 7 =$ _____

⑤b

The inverse operation is: _____

Test #1 – Page 2

Find the answer to these division questions.

6a) $146 \div 12 =$ _____

6b) The inverse operation is: _____

7a) $287 \div 20 =$ _____

7b) The inverse operation is: _____

8)
$$\begin{array}{r} 4 \overline{) 58} \end{array}$$

9)
$$\begin{array}{r} 6 \overline{) 79} \end{array}$$

10)
$$\begin{array}{r} 15 \overline{) 48} \end{array}$$