







Measurement – 1.1

Use the grid (or a ruler) to find the length of each line.

1.		<input type="checkbox"/> 5 centimeters	<input type="checkbox"/> 6 centimeters	<input type="checkbox"/> 7 centimeters
2.		<input type="checkbox"/> 7 centimeters	<input type="checkbox"/> 8 centimeters	<input type="checkbox"/> 9 centimeters
3.		<input type="checkbox"/> 1 centimeter	<input type="checkbox"/> 2 centimeters	<input type="checkbox"/> 3 centimeters
4.		<input type="checkbox"/> 11 centimeters	<input type="checkbox"/> 12 centimeters	<input type="checkbox"/> 13 centimeters
5.		<input type="checkbox"/> 5 centimeters	<input type="checkbox"/> 6 centimeters	<input type="checkbox"/> 7 centimeters
6.		<input type="checkbox"/> 11 centimeters	<input type="checkbox"/> 12 centimeters	<input type="checkbox"/> 13 centimeters