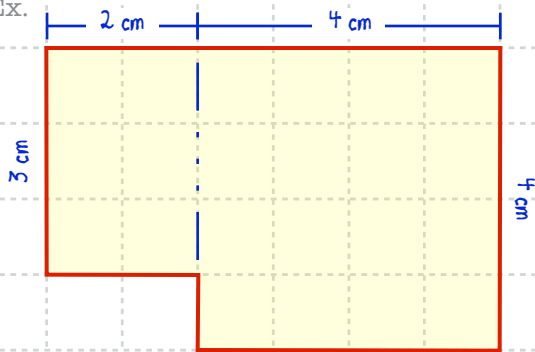


Measurement – 1.29

Find the AREA and the PERIMETER of these shapes.


Ex.



$$A = (3 \text{ cm} \times 2 \text{ cm}) + (4 \text{ cm} \times 4 \text{ cm})$$
$$6 \text{ cm}^2 + 16 \text{ cm}^2$$
$$\underline{\hspace{2cm}}$$
$$22 \text{ cm}^2$$

$$P = 20 \text{ cm}$$

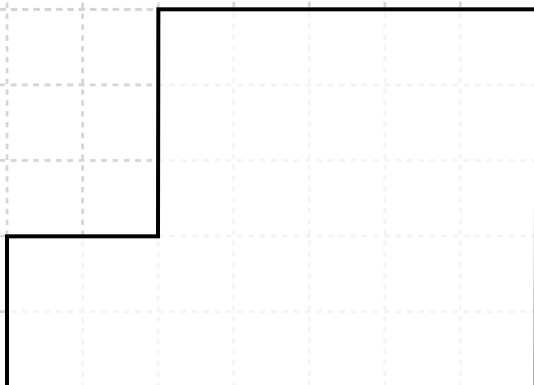
1.



$$A = \underline{\hspace{2cm}}$$
$$\underline{\hspace{2cm}}$$

$$P = \underline{\hspace{2cm}}$$

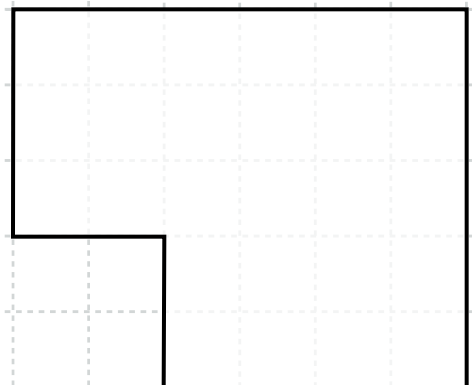
2.



$$A = \underline{\hspace{2cm}}$$
$$\underline{\hspace{2cm}}$$

$$P = \underline{\hspace{2cm}}$$

3.



$$A = \underline{\hspace{2cm}}$$
$$\underline{\hspace{2cm}}$$

$$P = \underline{\hspace{2cm}}$$