

# Measurement – 1.30

Find the AREA and the PERIMETER of these shapes.

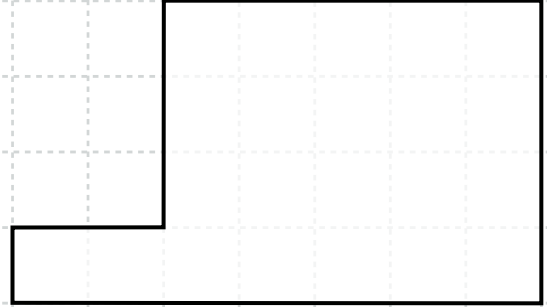
1.



A = \_\_\_\_\_  
\_\_\_\_\_

P = \_\_\_\_\_


2.



A = \_\_\_\_\_  
\_\_\_\_\_

P = \_\_\_\_\_

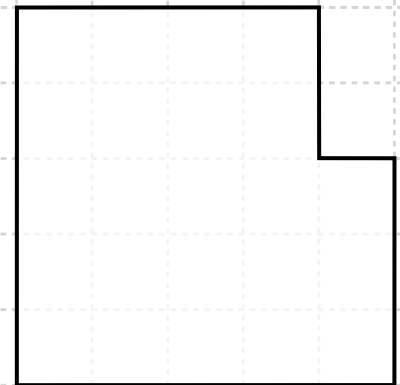
3.



A = \_\_\_\_\_  
\_\_\_\_\_

P = \_\_\_\_\_

4.



A = \_\_\_\_\_  
\_\_\_\_\_

P = \_\_\_\_\_