

Measurement – Test #1

This test covers all of the skills taught in this unit.

TIME:

PART 1: Find the length of each line.

1.



10 centimeters

11 centimeters

12 centimeters

2.



12 centimeters

13 centimeters

14 centimeters

3.



7 centimeters

8 centimeters

9 centimeters

PART 2: Make a straight line from each dot. (5 points)

10 centimeters

5 centimeters

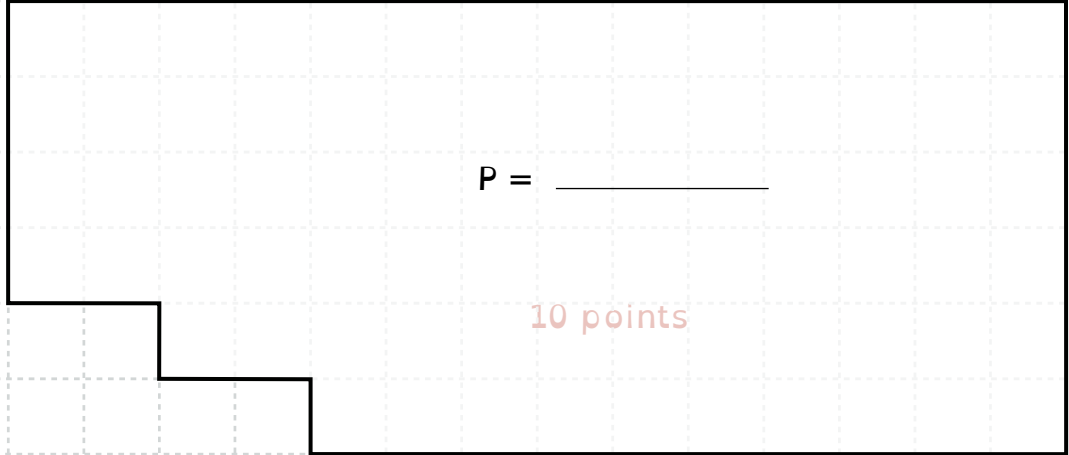
3 centimeters

14 cm

12 centimeters

PART 3: Find the PERIMETER and AREA of these shapes.

9.

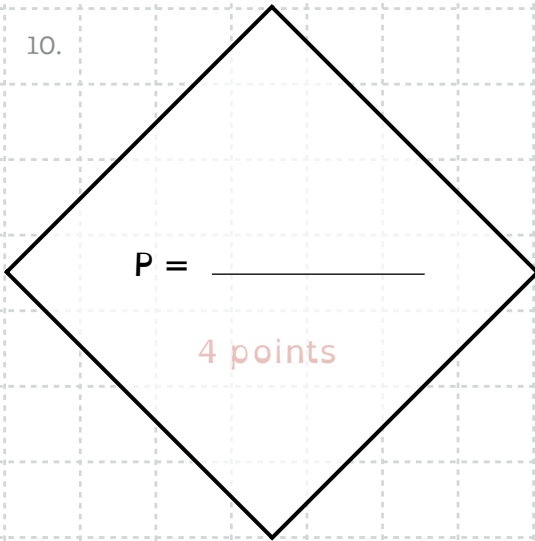


P = _____

10 points

A = _____

10.

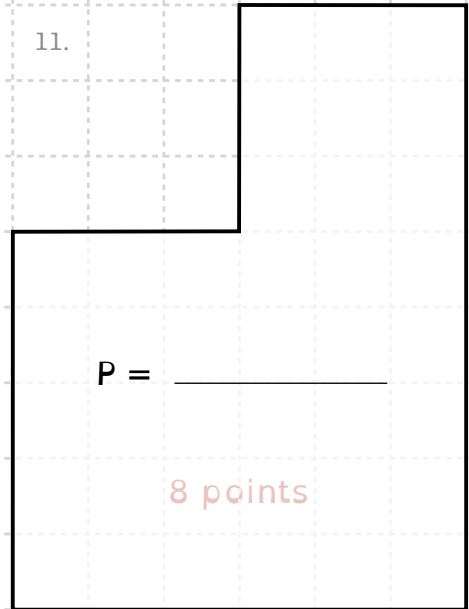


P = _____

4 points

A = _____

11.



P = _____

8 points

A = _____

